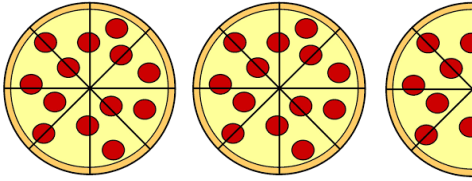


نام: .....

## اعداد مخلوط

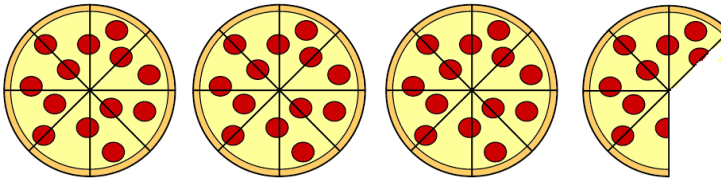
بگو در هر ردیف چقدر پیتزا وجود دارد؟ جواب های خود را به صورت عدد مخلوط بنویس!

الف)



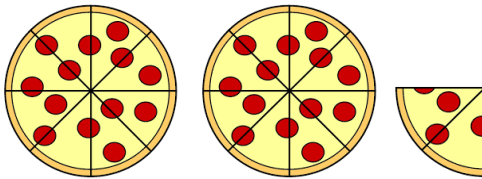
\_\_\_\_\_

ب)



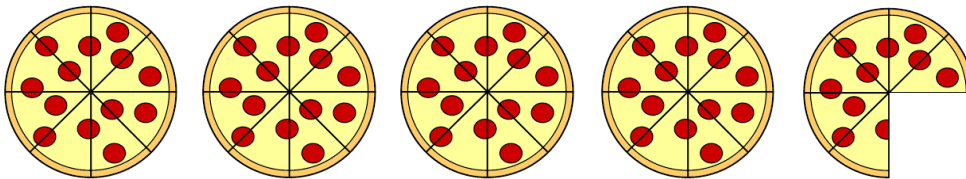
\_\_\_\_\_

پ)



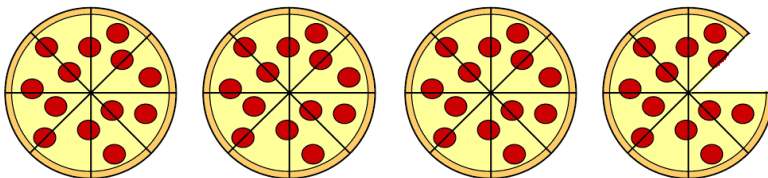
\_\_\_\_\_

ت)



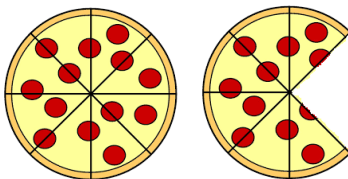
\_\_\_\_\_

ث)



\_\_\_\_\_

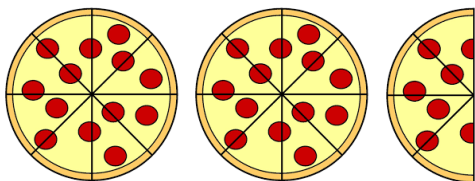
ج)



\_\_\_\_\_

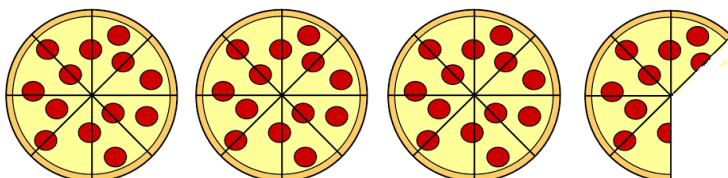
## پاسخ نامه

الف)



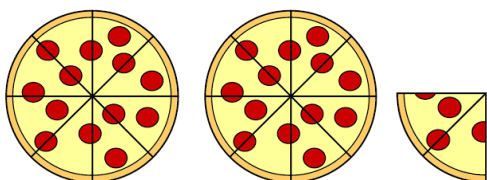
$$\frac{2}{8} + \frac{4}{8}$$

ب)



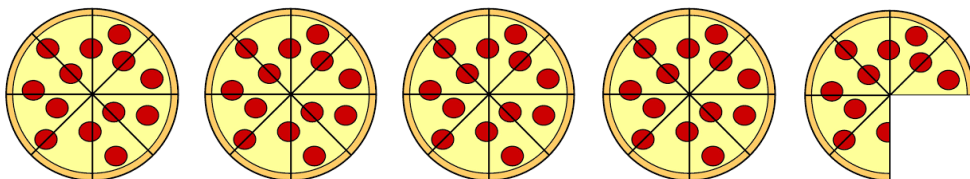
$$\frac{3}{8} + \frac{5}{8}$$

پ)



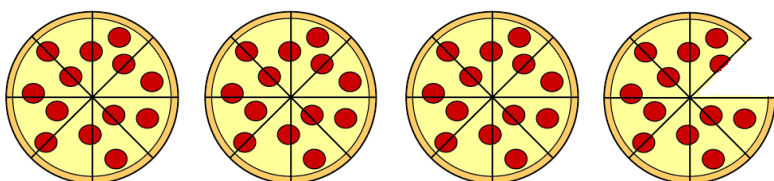
$$\frac{2}{8} + \frac{2}{8}$$

ت)



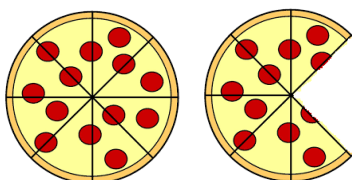
$$\frac{4}{8} + \frac{6}{8}$$

ث)



$$\frac{3}{8} + \frac{7}{8}$$

ج)



$$\frac{1}{8} + \frac{6}{8}$$