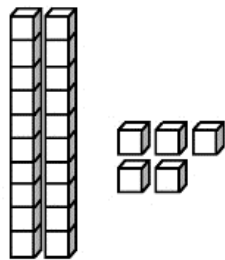


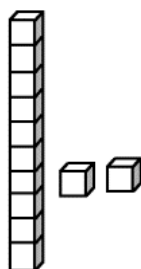
# درک مفهوم ارزش مکانی

تعداد مکعب ها را بشمار و در جای خالی عداد مناسب بنویس



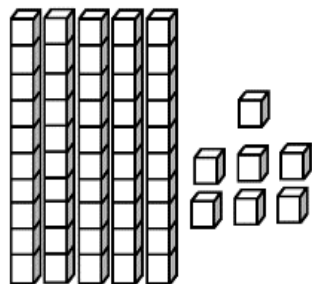
..... یکی ..... ۵ ..... ۲ ..... ده تایی

$$\underline{\quad\quad} + \underline{\quad\quad} = \underline{\quad\quad}$$



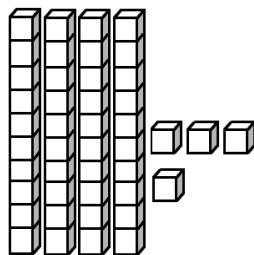
..... یکی ..... ده تایی

$$\underline{\quad\quad} + \underline{\quad\quad} = \underline{\quad\quad}$$



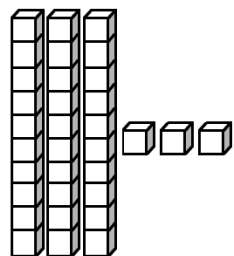
..... یکی ..... ده تایی

$$\underline{\quad\quad} + \underline{\quad\quad} = \underline{\quad\quad}$$



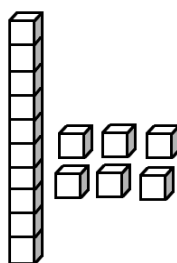
..... یکی ..... ده تایی

$$\underline{\quad\quad} + \underline{\quad\quad} = \underline{\quad\quad}$$



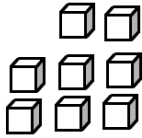
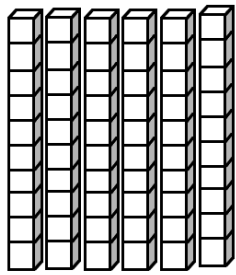
..... یکی ..... ده تایی

$$\underline{\quad\quad} + \underline{\quad\quad} = \underline{\quad\quad}$$



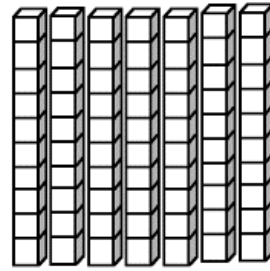
..... یکی ..... ده تایی

$$\underline{\quad\quad} + \underline{\quad\quad} = \underline{\quad\quad}$$



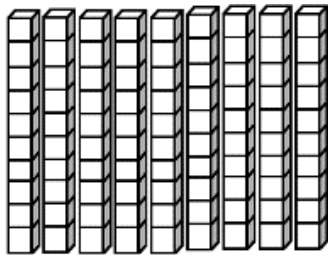
..... یکی ..... ده تایی

..... + ..... = .....



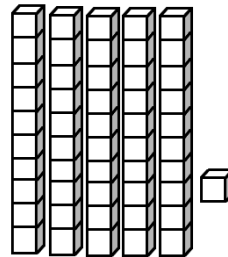
..... یکی ..... ده تایی

..... + ..... = .....



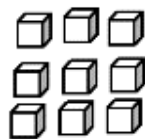
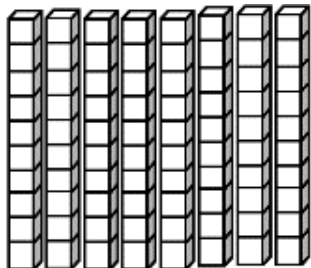
..... یکی ..... ده تایی

..... + ..... = .....




..... یکی ..... ده تایی

..... + ..... = .....



..... یکی ..... ده تایی

..... + ..... = .....



..... یکی ..... ده تایی

..... + ..... = .....